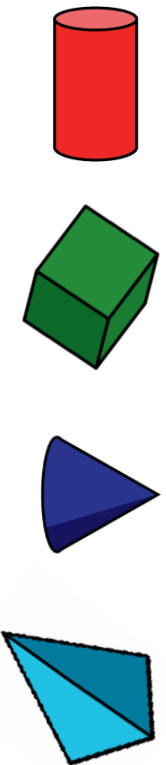


Properties of Shape

Name _____

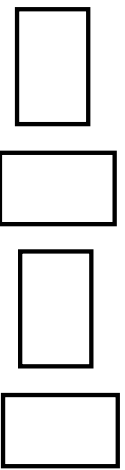
1 Match each shape to its name.

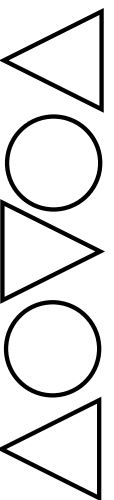


- cube
- cylinder
- pyramid
- cone

1 mark

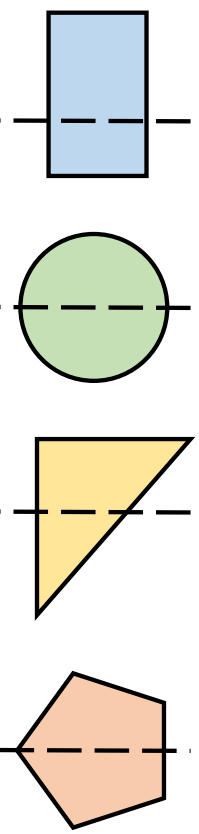
2 Draw the next two shapes in each pattern.





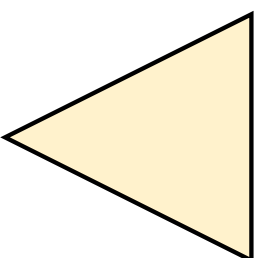
2 marks

3 Circle the shapes with a correct line of symmetry.



1 mark

4 Complete the sentences.




This is a triangle

It has sides.

It has 3 vertices.

1 mark



This is a _____

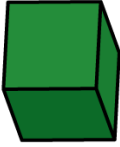

It has sides.

It has vertices.

2 marks

5

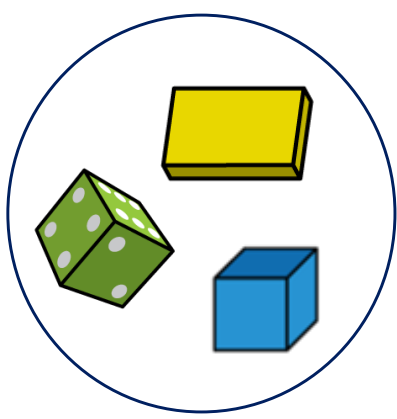
Complete the table.

Shape	Faces	Edges	Vertices
 Cube	6		8
 Square-based pyramid		8	5

2 marks

7

Amir has sorted some 3-D shapes.



Choose one correct label for each group from the labels below.

2 marks

6

Rosie is holding a 3-D shape.

She is counting the number of 2-D faces she can see.



I can see 4 rectangles and
2 squares.

What shape is Rosie holding?

1 mark

Circle how confident you feel with shape.

1 2 3 4 5

Not

Very

confident

confident